

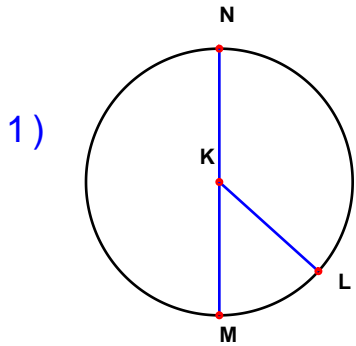
Name : _____

Score : _____

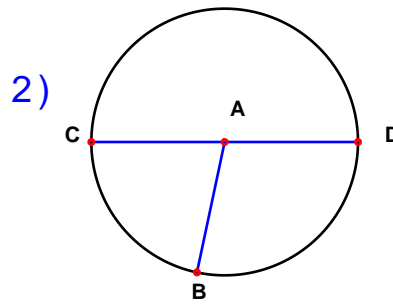
Teacher : _____

Date : _____

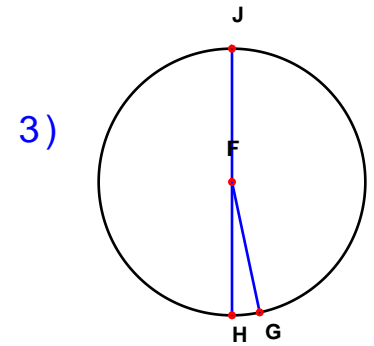
Solve the missing elements for each problem. Use 3.14 for π . Area = πr^2 ; C = πD



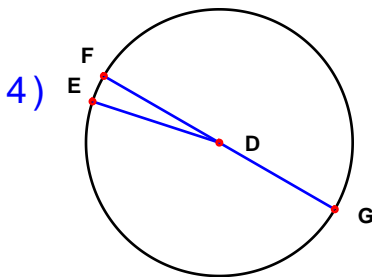
Radius: 17 cm
Diameter: _____
Circumference: _____
Area: _____



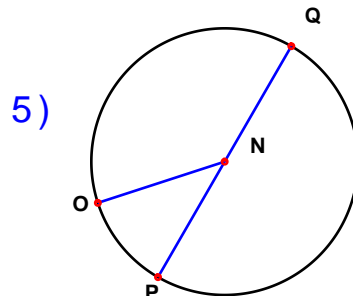
Radius: _____
Diameter: 28 cm
Circumference: _____
Area: _____



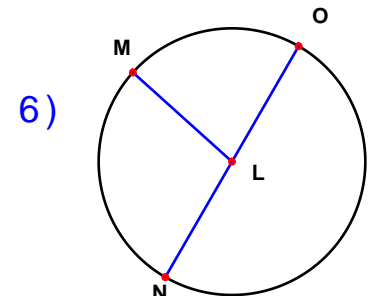
Radius: _____
Diameter: 24 cm
Circumference: _____
Area: _____



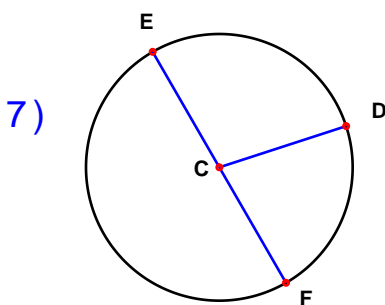
Radius: 11 cm
Diameter: _____
Circumference: _____
Area: _____



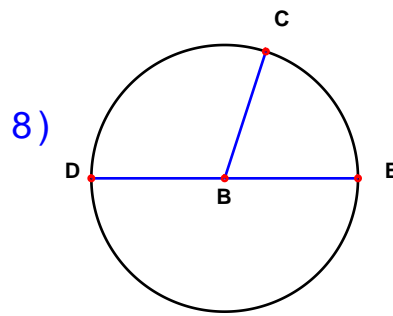
Radius: 13 cm
Diameter: _____
Circumference: _____
Area: _____



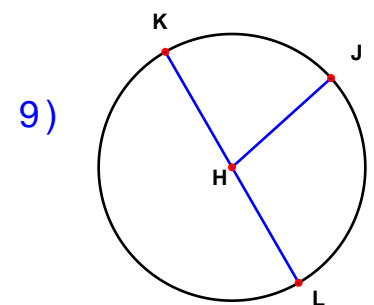
Radius: 19 cm
Diameter: _____
Circumference: _____
Area: _____



Radius: _____
Diameter: 30 cm
Circumference: _____
Area: _____



Radius: 5 cm
Diameter: _____
Circumference: _____
Area: _____



Radius: _____
Diameter: 12 cm
Circumference: _____
Area: _____

